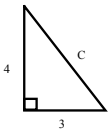


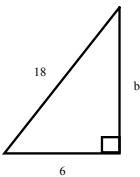
Apr 5-10:30 AM

- 1 Find the missing side.
Round your answer to the nearest hundredth (two decimal places).



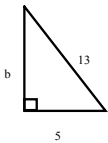
Apr 5-10:19 AM

- 2 Find the missing side.
Round off to the nearest hundredth if necessary.



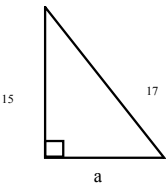
Apr 5-10:26 AM

- 3 Find the missing side.
Round off to the nearest hundredth if necessary.



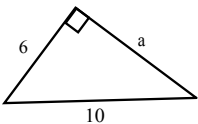
Apr 5-10:30 AM

- 4 Find the missing side.
Round off to the nearest hundredth if necessary.



Apr 5-10:32 AM

- 5 Find the missing side.
Round off to the nearest hundredth if necessary.



Apr 5-10:34 AM